

Day 1

1. $5 \times 3 =$
2. What is the difference between 21 and 85?
3. Name the shape:



4. $365 + 24 =$
5. How many minutes are in 2 hours and 15 minutes?

Day 2

1. $20 + 20 + 32 =$
2. How many days are in January?
3. $22 \div 2 =$
4. Write the number that this place value chart represents:

Th	H	T	O
			

5. Bella bought herself a magazine and some sweets. It cost her £2.00. She used a £5.00 note to buy it. How much change will she get?

Day 3

1. What is the multiplication question (and answer) is this array showing?



2. $430+70=$

3. $3 \times 8 =$

4. Miss Fearn has 10 sweets. She gives 2 sweets to Miss Chalk, 2 sweets to Miss Ryder and 2 sweets to Mrs Mendez. How many sweets does Miss Fearn have left?

5. What time is the clock showing?



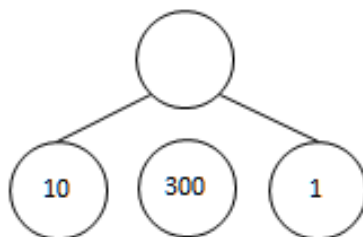
Day 4

1. Write 1682 in words:

2. $110 \div 10 =$

3. $6 \times 4 =$

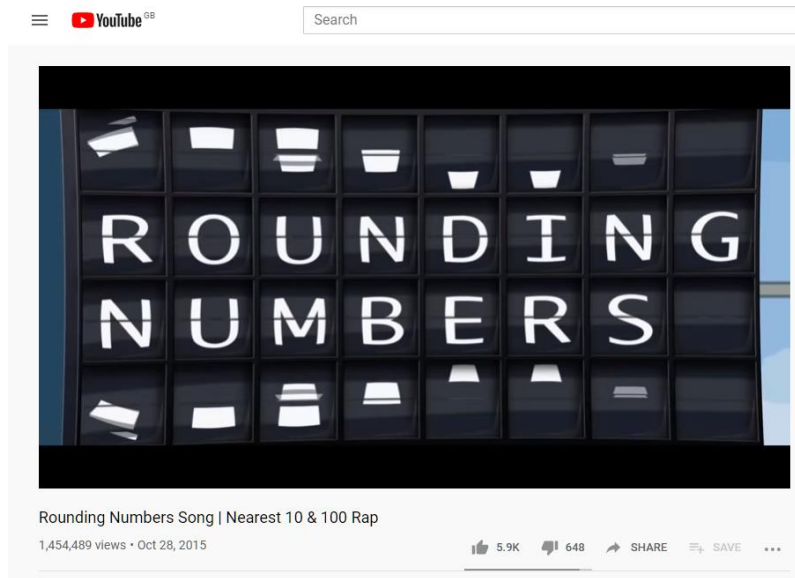
4. Complete the part, part, whole:



5. What is ten less than 201?

Day 5: Type the following URL into google and watch the clip on YouTube.

<https://youtu.be/pNfz-JU2cKE>

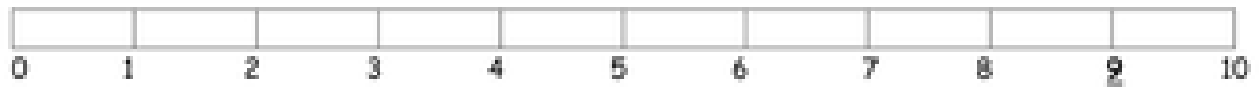


Round these numbers to the nearest 10:

1. 11
2. 21
3. 26
4. 45
5. 98

Rounding to the nearest 10

1.) Is 9 nearer to 0 or 10? _____



2.) Is 41 nearer to 40 or 50? _____



3.) Is 26 nearer to 20 or 30? _____



4.) Is 15 nearer to 10 or 20? _____



5.) Is 73 nearer to 70 or 80? _____



6.) Is 44 nearer to 40 or 50? _____



7.) Is 98 nearer to 90 or 100? _____



Rounding to the Nearest Ten

Round each number to the nearest ten.

34 - _____

91 - _____

86 - _____

25 - _____

72 - _____

53 - _____

Star Numbers

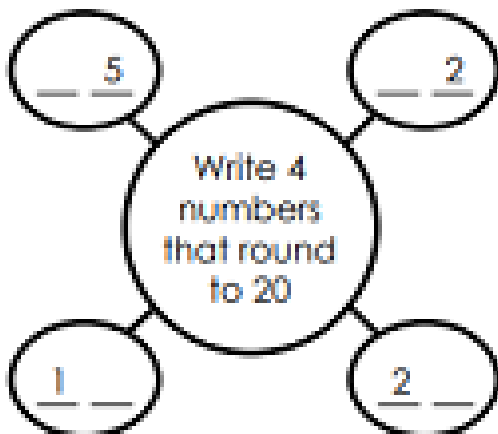


Which two star numbers round to 40?

_____ and _____

Which two star numbers round to 30?

_____ and _____



Write **True** or **False** for each statement.

27 rounds to 20. _____

8 rounds to 10. _____

94 rounds to 90. _____

Rounding to the Nearest Hundred

Round each number to the nearest hundred.

264 - _____

85 - _____

545 - _____

239 - _____

350 - _____

834 - _____

Bubble Numbers

572

748

650

635

762

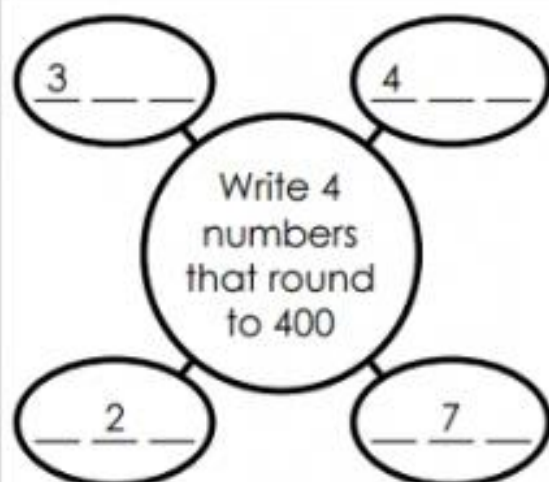
804

Which two bubble numbers round to 700?

_____ and _____

Which two bubble numbers round to 600?

_____ and _____



Write **True** or **False** for each statement.

765 rounds to 700. _____

829 rounds to 800. _____

109 rounds to 100. _____

Day 1 answers




1. $5 \times 3 = 15$
2. What is the difference between 21 and 85? 64
3. Name the shape: Hexagon



4. $365 + 24 = 389$
5. How many minutes are in 2 hours and 15 minutes? 135

Day 2 answers

1. $20 + 20 + 32 = 72$
2. How many days are in January? 31
3. $22 \div 2 = 11$
4. Write the number that this place value chart represents: 1013

Th	H	T	O
			

5. Bella bought herself a magazine and some sweets. It cost her £2.00. She used a £5.00 note to buy it. How much change will she get? £3.00

Day 3 answers

1. What is the multiplication question (and answer) is this array showing?

$3 \times 5 = 15$



2. $430 + 70 = 500$

3. $3 \times 8 = 24$

4. Miss Fearn has 10 sweets. She gives 2 sweets to Miss Chalk, 2 sweets to Miss Ryder and 2 sweets to Mrs Mendez. How many sweets does Miss Fearn have left? 4

5. What time is the clock showing?

Ten to two or 1:50 or 13:50



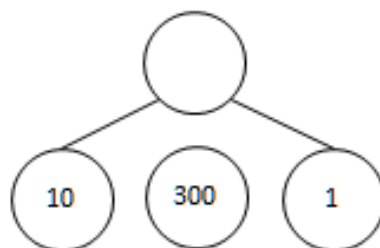
Day 4 answers

1. Write 1682 in words: One thousand six hundred and eighty-two

2. $110 \div 10 = 11$

3. $6 \times 4 = 24$

4. Complete the part, part, whole: 311



5. What is ten less than 201? 191

Day 5:

Round these numbers to the nearest 10:

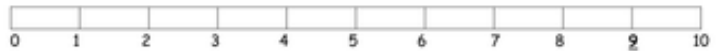
1. 10
2. 20
3. 30
4. 50
5. 100

Task 1

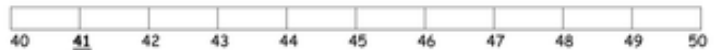
Rounding to the nearest 10

1. 10
2. 40
3. 30
4. 20
5. 70
6. 40
7. 100


1.) Is 9 nearer to 0 or 10? _____




2.) Is 41 nearer to 40 or 50? _____



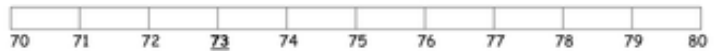
3.) Is 26 nearer to 20 or 30? _____



4.) Is 15 nearer to 10 or 20? _____




5.) Is 73 nearer to 70 or 80? _____



6.) Is 44 nearer to 40 or 50? _____



7.) Is 98 nearer to 90 or 100? _____



Task two

Rounding to the Nearest Ten

Round each number to the nearest ten.

$34 - \underline{\quad 30 \quad}$

$91 - \underline{\quad 90 \quad}$

$86 - \underline{\quad 90 \quad}$

$25 - \underline{\quad 30 \quad}$

$72 - \underline{\quad 70 \quad}$

$53 - \underline{\quad 50 \quad}$

Star Numbers



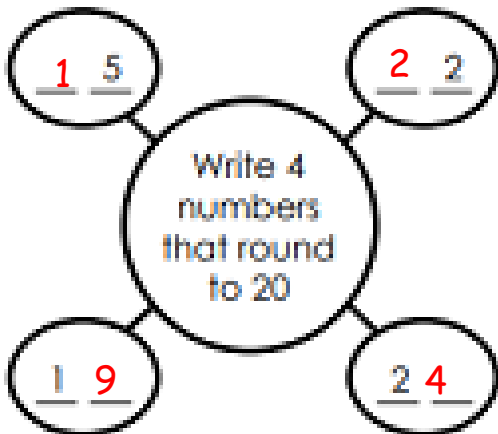
Which two star numbers round to 40?

36 and 44



Which two star numbers round to 30?

27 and 31



Write **True** or **False** for each statement.

27 rounds to 20. false

8 rounds to 10. true

94 rounds to 90. true

Task three:

Rounding to the Nearest Hundred

Round each number to the nearest hundred.

264 - 300

85 - 100

545 - 500

239 - 200

350 - 400

834 - 800

Bubble Numbers

572

748

650

Which two bubble numbers round to 700?

650 and 748

635

762

804

Which two bubble numbers round to 600?

572 and 635

3 9 9

4 2 5

Write 4 numbers that round to 400

4 2 9

3 7 1

Write **True** or **False** for each statement.

765 rounds to 700. false

829 rounds to 800. true

109 rounds to 100. true