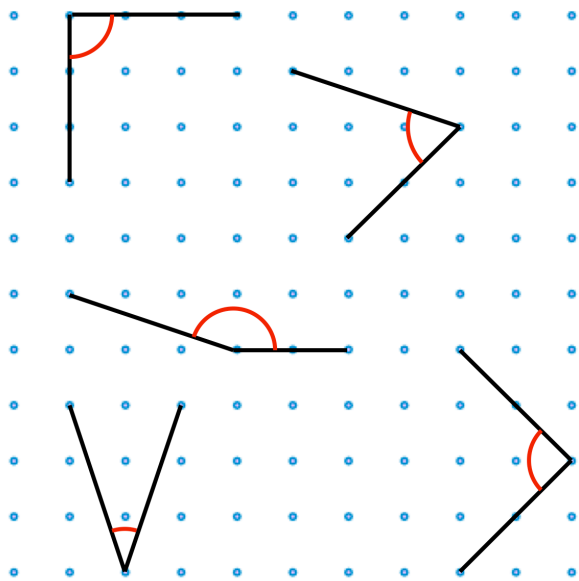




6th July

$40 \div 20$

$$\begin{array}{r} 36 \\ \times 5 \\ \hline \end{array}$$



Tick the two acute angles

Circle the obtuse angle

Draw a 5cm line



7th July

1,900 – 1,500

$$\begin{array}{|c|} \hline 5 \quad 9 \quad 0 \\ \hline \end{array}$$

This chart shows the number of gold and silver tokens collected by some children

	Gold	Silver
Ben	+++ +++	+++ +++ +++
Flo	+++ +++	+++ +++ +++
Mia	+++ +++ +++	+++ +++
Tom	+++ +++	+++ +++

Who has more gold token than silver tokens?

Who has 14 gold tokens?

Seven children share a bag of grapes.
 Each child gets **7** grapes.
 There are **5** grapes left over.

How many grapes were in the bag altogether?

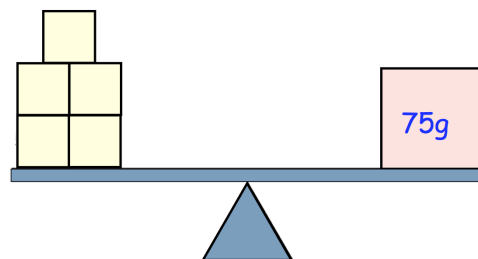


8th July

$$4 \times 4 \times 2$$

$$6 \times 6 = 50 - \boxed{}$$

How much does one yellow block weigh?



Circle all the numbers that are multiples of six

10 16 24 28 32

Sidney has 40p Jessica has 52p

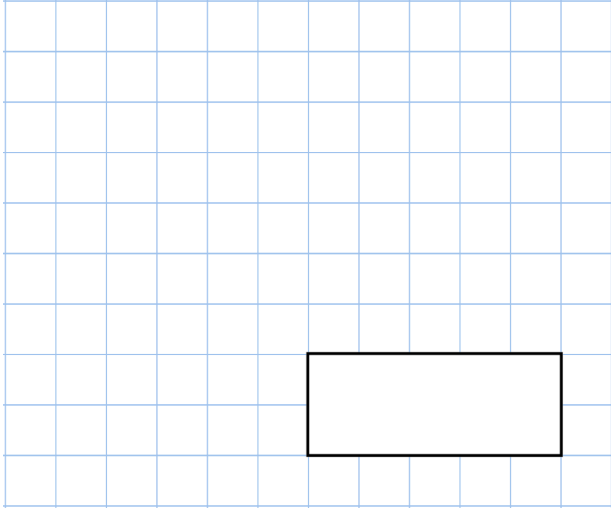
Jessica gives some money to Sidney. They now have the **same amount of money**.

How much money did Jessica give Sidney?

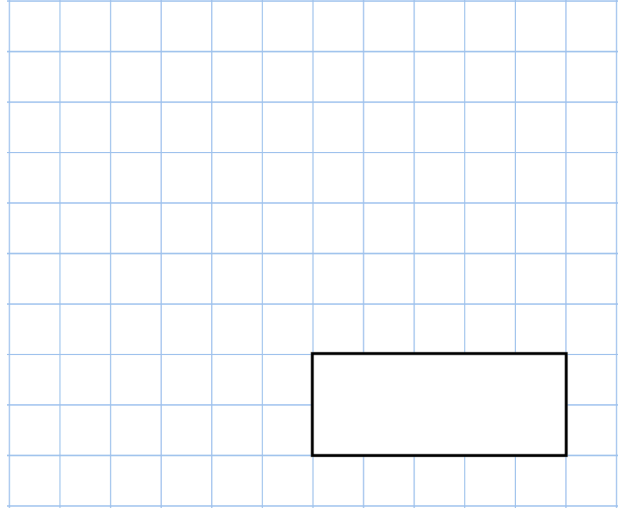


9th July

$700 + 700$



9×9



53 children get on a bus
28 of them are boys.

How many are girls?




The bus leaves school at this time

8 : 30

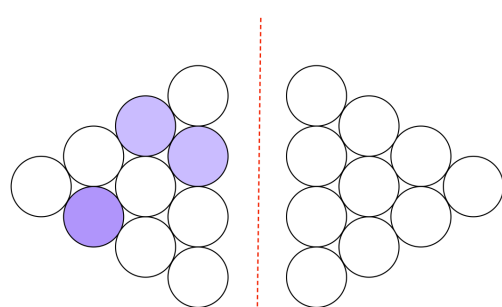
It gets back to school **three and a half hours** later

At what time does it get back?



Complete the reflection of this pattern in the mirror line

mirror line



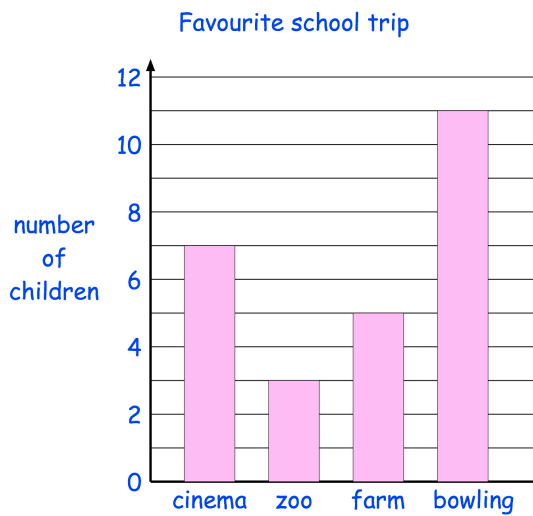


10th July

$56 - 9$

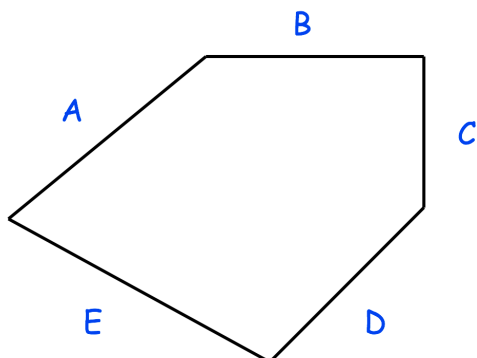
$145 - 50$

The children in a class vote for their favourite school trip. Each child voted once.



How many **more** children voted for **bowling** than for the **zoo**?

How many children voted **altogether**?



Two sides of this shape are the same length.

Write their letters.

Name: Answers

Primary 5-a-day

Bronze



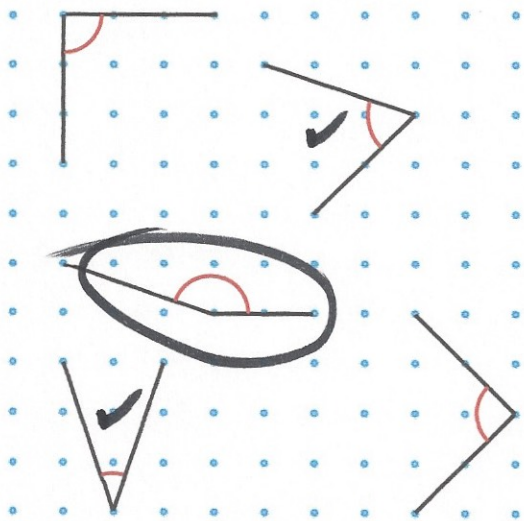
6th July

$40 \div 20$

2

$$\begin{array}{r} 36 \\ \times 5 \\ \hline 180 \end{array}$$


180



Tick the two acute angles

Circle the obtuse angle

Draw a 5cm line





7th July

1,900 – 1,500

400

$$\begin{array}{r} 18 \\ 5 \overline{) 90} \end{array}$$

18

This chart shows the number of gold and silver tokens collected by some children

	Gold	Silver
Ben	+++ ++	+++ ++ ++
Flo	+++ ++	+++ ++ ++
Mia	+++ ++ ++	+++ ++
Tom	+++ ++	+++ ++

Who has more gold tokens than silver tokens?

Mia

Who has 14 gold tokens?

Flo

Seven children share a bag of grapes.

Each child gets 7 grapes.

There are 5 grapes left over.

$$7 \times 7 = 49$$

$$49 + 5 = 54$$

How many grapes were in the bag altogether?

54

Name: Answers

Primary 5-a-day

Bronze



8th July

$$4 \times 4 \times 2$$

32

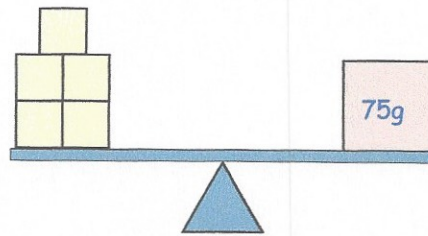
$$6 \times 6 = 50 - \square$$

$$6 \times 6 = 36$$

14

How much does one yellow block weigh?

$$75 \div 5 = 15g$$



Circle all the numbers that are multiples of six

10 16 24 28 32

Sidney has 40p Jessica has 52p

Jessica gives some money to Sidney.
They now have the **same amount of money**.

How much money did Jessica give Sidney?

6p

Name: Answers

Primary 5-a-day

Bronze



9th July

$700 + 700$

1400

9×9

81

53 children get on a bus
28 of them are boys.

How many are girls?

$53 - 28 = \underline{25}$



The bus leaves school at this time

8 : 30

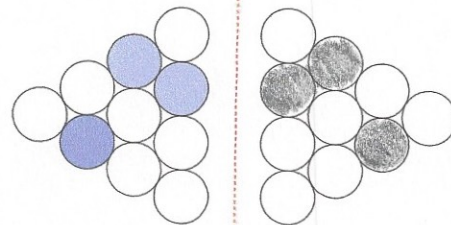
It gets back to school **three and a half hours** later

At what time does it get back?

12 : 00

Complete the reflection of this pattern in the mirror line

mirror line



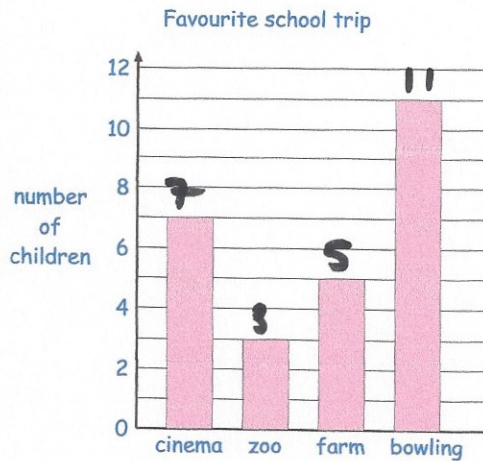


10th July

$56 - 9$

$145 - 50$

The children in a class vote for their favourite school trip. Each child voted once.

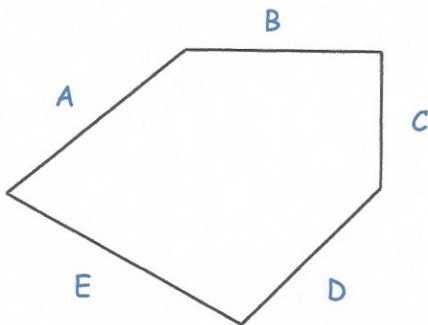


How many **more** children voted for **bowling** than for the **zoo**?

$11 - 3 = 8$

How many children voted **altogether**?

$7 + 3 + 5 + 11 = 26$



Two sides of this shape are the same length.

Write their letters.

B and D