

# Day 1

## Maths- 5 a day

### 5 a day

1.  $17 + 4 = \underline{\hspace{2cm}}$

2. Circle the largest number

73      25      96

3. What comes next in the sequence?

25, 30, 35,     ,     ,     

4. Circle the right angles



5. What is the name of this shape?                     



# Day 1 ANSWERS

Maths- 5 a day



5 a day

1.  $17 + 4 = \underline{21}$

2. Circle the largest number

73    25    96

3. What comes next in the sequence?

25, 30, 35, 40, 45, 50

4. Circle the right angles



5. What is the name of this shape?



Irregular hexagon

# Day 2

## Maths- 5 a day

### 5 a day

1. Using place value discs, show the number 678

Hundreds	Tens	Ones

2. Which cafe has more grapes.

\_\_\_\_\_



Cafe A



Cafe B

3. What is the next even number after 777 \_\_\_\_\_

4. Write the number 882 in words.

\_\_\_\_\_

\_\_\_\_\_

5. Which number is greater, 725 or 752? \_\_\_\_\_

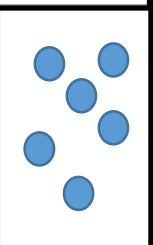
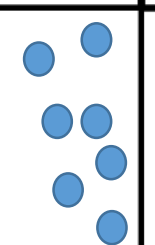



# Day 2 ANSWERS

## Maths- 5 a day

5 a day

1. Using place value discs, show the number 678

Hundreds	Tens	Ones
		

2. Which cafe has more grapes.

Cafe A



Cafe A



Cafe B

3. What is the next even number after 777

778

4. Write the number 882 in words.

Eight hundred and eighty two.

5. Which number is greater, 725 or 752? 752

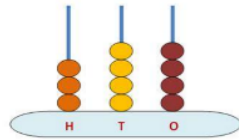
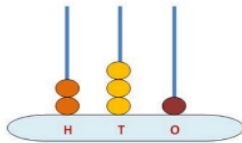


# Day 3

## Maths- 5 a day

### 5 a day

1. Which representation is greater?




\_\_\_\_\_ > \_\_\_\_\_

2. Order the numbers in decsending order

236    123    458    598    142

3. Place the numbers on the number line: 856, 859, 853



4. Write the number 288 in words.

---

---

5. Which number is smaller, 685 or 695?

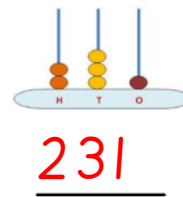
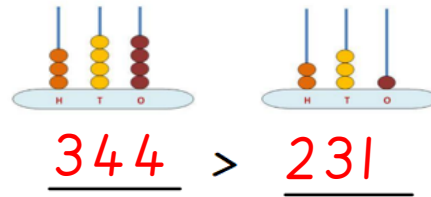
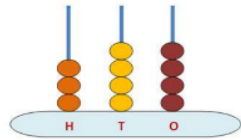
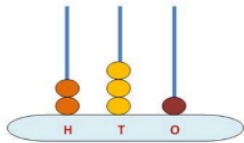


# Day 3 ANSWERS

## Maths- 5 a day

### 5 a day

1. Which representation is greater?



$$\underline{344} > \underline{231}$$

2. Order the numbers in decsending order

236    123    458    598    142

598    458    236    142    123

3. Place the numbers on the number line: 856, 859, 853



4. Write the number 288 in words.

Two hundred and eighty eight.

5. Which number is smaller, 685 or 695?    685



# Day 4

## Maths- 5 a day

### 5 a day

1. Circle all of the odd numbers.

145    321    656    778    919    222

2. Estimate the number the arrow is pointing to

150



350

3. Write the number 282 in words.

---

---

4. Draw dienes to represent 697.

5. What is the next odd number after 899?

---





# Day 4 ANSWERS

## Maths- 5 a day



5 a day

1. Circle all of the odd numbers.

145 321 656 778 919 222

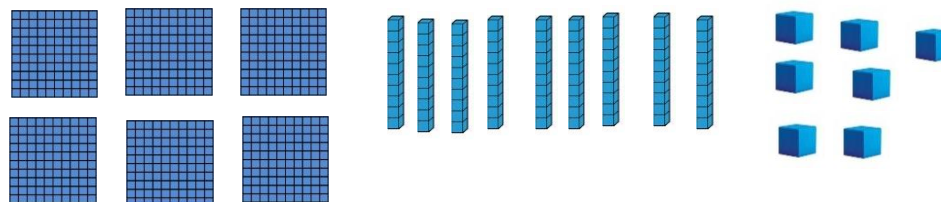
2. Estimate the number the arrow is pointing to



3. Write the number 282 in words.

Two hundred and eighty two.

4. Draw dienes to represent 697.



5. What is the next odd number after 899?

901



# Day 5

## Maths- 5 a day

### 5 a day

1. Circle all of the even numbers.

569   712   265   896   315   464   752

2. Estimate the number the arrow is pointing to

80



100

3. Write the number 828 in words.

---

---

4. Draw dienes to represent 609.

5. What is the next even number after 798? \_\_\_\_\_



# Day 5 ANSWERS

## Maths- 5 a day

### 5 a day

1. Circle all of the even numbers.

569   712   265   896   315   464   752

2. Estimate the number the arrow is pointing to




3. Write the number 828 in words.

---

*Eight hundred and twenty eight.*

---

4. Draw dienes to represent 609.



5. What is the next even number after 798? 800

