


Monday

	4	2	
+	3	9	

$9200 - 2100$



2 Apples cost the same as 1 pineapple

One apple costs 45p

How much does **one** pineapple cost?

Circle the right angle



Circle the multiples of 4

14

16

30


28

26

Tuesday

	4	5	
x		3	

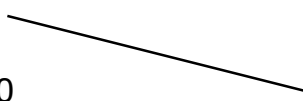
$106 - 57$



Draw a pair of parallel lines

Draw lines to join **all the pairs** of number cards that have a **total of 300**

80	285
190	220
35	265
15	140
160	110



Match each shape to the correct name



Pentagon



Octagon



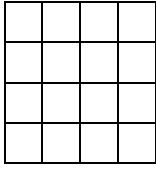
Heptagon



Triangle

Wednesday

Double 48



	1	7		
X		5		

Name this shape



Find the two missing numbers

_____, 12, _____, 16 _____, 24

Tick any shape that has a right angle



Thursday

	9	9	
-	2	7	

$75 + 130$

20 $\xrightarrow{\text{is 14 less than}}$ 34

$\xrightarrow{\text{is 14 less than}}$ 72

Put these prices in order, starting with the smallest

£0.76

80p

£0.99

45p

--	--	--	--

Smallest

Biggest

Menu

Coffee £1.60

Tea £1.00

Scone £2.00

Biscuit £0.80

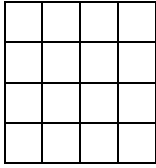
Maddie buys **two biscuits**

She pays £2


How much change does she get?

Friday

6×8



$491 - 6$

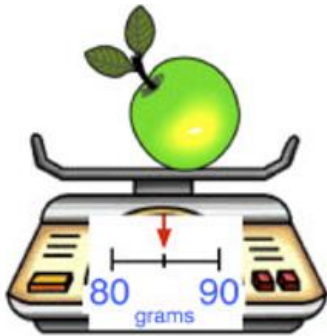


In the diagram, three circles in a straight line **add to 40**.

Write the missing numbers

	9	20
14		11
15		9

Write down the mass of the apple



Write 4 in Roman numerals

Monday Answers

Name: ANSWER

5-a-day

Bronze



6th April

$\begin{array}{r} 42 \\ + 39 \\ \hline 81 \end{array}$	<p>81</p>
--	-----------

$9,200 - 2,100$

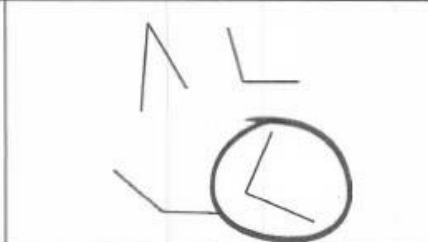
$\begin{array}{r} 9200 \\ - 2100 \\ \hline 7100 \end{array}$	<p>7100</p>
--	-------------

2 apples cost the same as 1 pineapple
 One apple costs 45p
 How much does **one** pineapple cost?

$2 \times 45p = \underline{\underline{90p}}$




Circle the right angle



Circle the multiples of 4

14	30	26
16	28	

Tuesday Answers

Name: Answers 5-a-day Bronze 

7th April

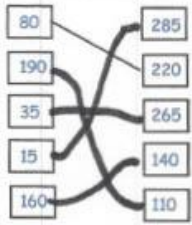
$\begin{array}{r} 45 \\ \times 3 \\ \hline 135 \end{array}$ <div style="border: 1px solid black; width: 100px; margin: 20px auto; padding: 5px; text-align: center;">135</div>	$106 - 57$ $\begin{array}{r} 106 \\ - 57 \\ \hline 49 \end{array}$ <div style="border: 1px solid black; width: 100px; margin: 20px auto; padding: 5px; text-align: center;">49</div>
--	--

Draw a pair of parallel lines







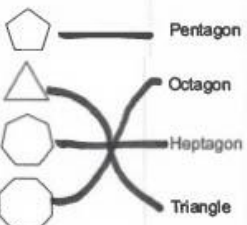
Draw lines to join **all the pairs** of number cards that have a **total of 300**

80	285
190	220
35	265
15	140
160	110



Match each shape to the correct name

	—————	Pentagon
	—————	Octagon
	—————	Heptagon
	—————	Triangle



Wednesday Answers

Name: Answers

5-a-day

Bronze



8th April

Double 48

$$\begin{array}{r} 48 \\ \times 2 \\ \hline 96 \end{array}$$


96

$$\begin{array}{r} 17 \\ \times 5 \\ \hline 85 \end{array}$$

85

Name this shape

Rectangle



Find the two missing numbers

8 12 16 20 24

Tick any shape that has a right angle



Thursday Answers

Name: Answers

5-a-day

Bronze



9th April

$\begin{array}{r} 99 \\ - 27 \\ \hline 72 \end{array}$
72

75 + 130

$\begin{array}{r} 130 \\ + 75 \\ \hline 205 \end{array}$
205

20 $\xrightarrow{\text{is 14 less than}}$ 34

58 $\xrightarrow{\text{is 14 less than}}$ 72

$\begin{array}{r} 672 \\ - 14 \\ \hline 58 \end{array}$

Put these prices in order, starting with the smallest

£0.76	80p	£0.99	45p
45p	0.76	80p	0.99
smallest			largest

Menu

Coffee £1.60
 Tea £1.00
 Scone £2.00
 Biscuit £0.80

Maddie buys two biscuits
 She pays £2

How much change does she get?

$2 \times 0.80 = \cancel{1.60}$
 $\pounds 2 - 1.60 = \underline{40p}$

Friday Answers

Name: Answer

5-a-day

Bronze



10th April

6×8

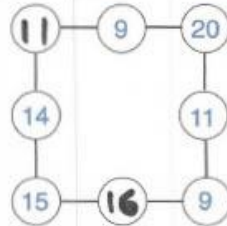
48

$491 - 6$

485

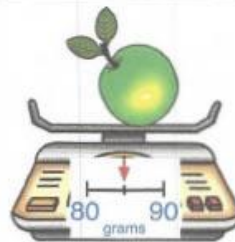
In the diagram, three circles in a straight line **add to 40**.

Write in the missing numbers.



Write down the mass of the apple

85g



Write 4 in Roman numerals

IV

