

Monday

$$42 \div 7$$

$$120 - 45$$

Write **am** or **pm** in each box

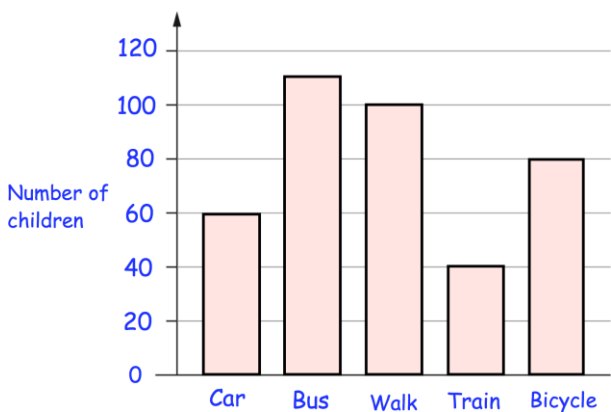
Fabian has his lunch at **half past twelve**

12:30

Fabian wakes up each morning at **quarter past six**

6:15

The bar chart shows how children at a primary school travelled to school each morning



How many children travelled to school by **bicycle**?

How many **more** children travelled to school by **walking** than by **train**?

Tuesday

$29 + 88$

--

$$1,025 - 100$$

A group of friends earn £40 by cutting grass.

They share the money **equally**
They get £5 each.

How many friends are in the group?



--

Draw a 4cm line

--

Andrea has these digit cards

1 4 6 7

She makes a 2-digit number and a 1-digit number.

She adds them together.

Her answer is a **multiple of 10**

What could Andrea's addition be?

7

+

7

1

Wednesday

$$120 \times 2$$

$$400 + 900$$

Georgia bought 3 items in a shop.
Her receipt is shown below.
The price of the milk has been torn off.

How much was the milk?

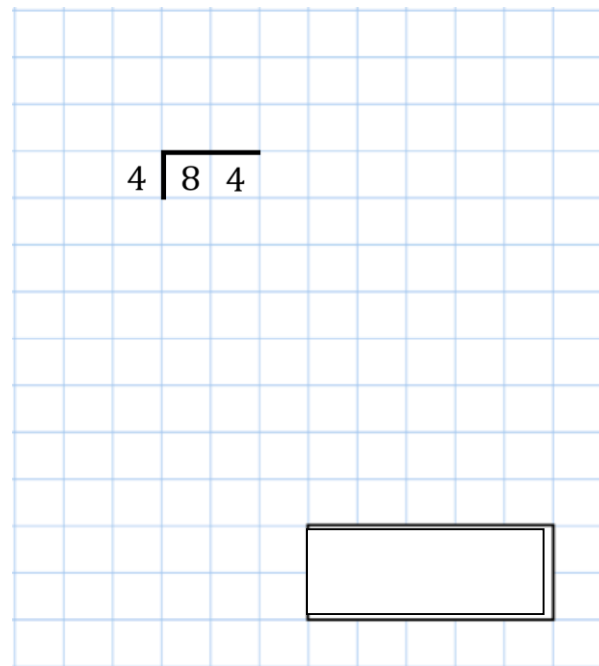
Milk	
Bread	£1.00
Banana	£0.35
<hr/>	
Total	£2.50

Draw a hexagon

Harry has £25
Harry has £16 less than Jenna

How much money do they have in total?

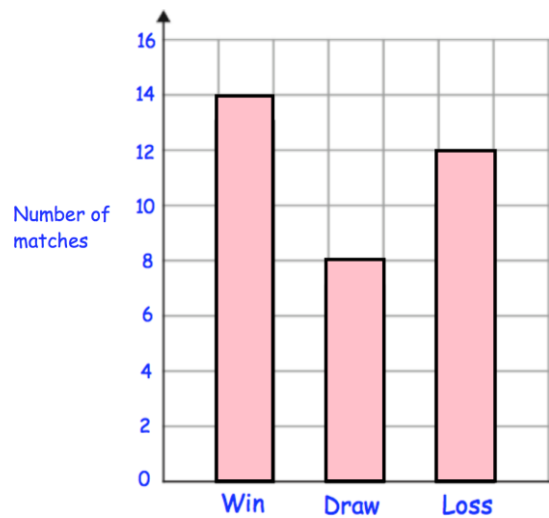
Thursday



$$31 + 16 + 25$$

Bristol City play some football matches

Here are the results



How many matches did they **draw**?

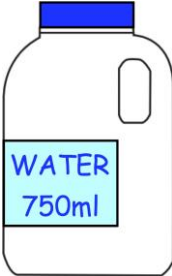
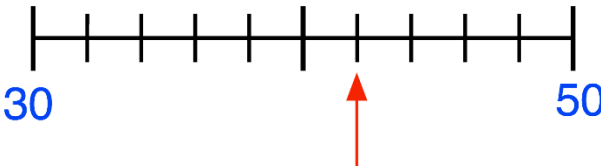

How many matches did they play in **total**?

The children at Highfield School are collecting money for charity.

Their target is £200

So far they have collected £135

How much **more** money do they need to reach their target?

Friday	
$\frac{1}{2}$ of 16	3×18
<input type="text"/>	<input type="text"/>
A bottle of water holds 750 millilitres 200 millilitres of water is poured out How much water is left?	 <input type="text"/>
What number is the arrow pointing to?	 <input type="text"/>
Gianluca, James and Henry run a charity cake sale. They want to make 42 cupcakes in total How many cupcakes should each boy make?	 <input type="text"/>

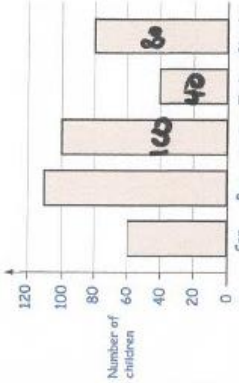
Monday

Answers

1st April

Primary 5-a-day

Bronze

$42 \div 7$	$120 - 45$
$\begin{array}{r} 120 \\ - 45 \\ \hline 75 \end{array}$	$\begin{array}{r} 120 \\ - 45 \\ \hline 75 \end{array}$
6	75
<p>Write am or pm in each box</p> <p>Fabian has his lunch at half past twelve</p> <p>12:30 pm</p>	<p>Fabian wakes up each morning at quarter past six</p> <p>6:15 am</p>
<p>The bar chart shows how children at a primary school travelled to school each morning</p> 	<p>How many children travelled to school by bicycle?</p> <p>80</p> <p>How many more children travelled to school by walking than by train?</p> $100 - 40 = 60$



Tuesday

Answers

2nd April

5-a-day

Bronze

$29 + 88$	$1,025 - 100$
$\begin{array}{r} 29 \\ + 88 \\ \hline 117 \end{array}$	$\begin{array}{r} 1025 \\ - 100 \\ \hline 925 \end{array}$
<p>A group of friends earn £40 by cutting grass.</p> <p>They share the money equally</p> <p>They get £5 each.</p> <p>How many friends are in the group?</p>	<p>$40 \div 5 = 8$</p> 
<p>Draw a 4cm line</p>	
<p>Andrea has these digit cards</p> <p>1 4 6 7</p> <p>She makes a 2-digit number and a 1-digit number.</p> <p>She adds them together.</p> <p>Her answer is a multiple of 10</p>	<p>What could Andrea's addition be?</p> $\boxed{4} + \boxed{16}$ <p>(any combination ending in '4' and '6')</p>


Wednesday

Answers

3rd April

5-a-day

Bronze

120×2	$400 + 900$								
240	1300								
Georgia bought 3 items in a shop. Her receipt is shown below. The price of the milk has been torn off. How much was the milk? $\begin{array}{r} 2.50 \\ - 1.35 \\ \hline \end{array}$	<table><tr><td>Milk</td><td>£1.00</td></tr><tr><td>Bread</td><td>£0.35</td></tr><tr><td>Banana</td><td></td></tr><tr><td>Total</td><td>£2.50</td></tr></table>	Milk	£1.00	Bread	£0.35	Banana		Total	£2.50
Milk	£1.00								
Bread	£0.35								
Banana									
Total	£2.50								
Draw a hexagon  (for example)									
Harry has £25 Harry has £16 less than Jenna How much money do they have in total? $\begin{array}{r} 25 - 16 = 9 \\ 25 + 9 = \end{array}$	$\begin{array}{r} 34 \end{array}$								

© Corbettmaths 2017

www.corbettmaths.com

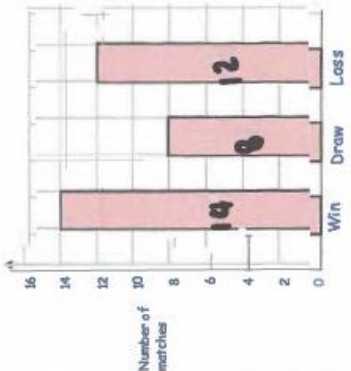
Thursday

Answers

4th April

5-a-day

Bronze

$31 + 16 + 25$	72
$\begin{array}{r} 31 \\ 16 \\ 25 \\ \hline 72 \end{array}$	
Bristol City play some football matches. Here are the results 	How many matches did they draw? 8
The children at Highfield School are collecting money for charity. Their target is £200 So far they have collected £135	How much more money do they need to reach their target? $\begin{array}{r} 200 - 135 \\ = 65 \end{array}$

Friday

Name: Answers

5-a-day

Bronze



5th April

$\frac{1}{2}$ of 16

8

3×18

$$\begin{array}{r} 18 \\ \times 3 \\ \hline 54 \end{array}$$

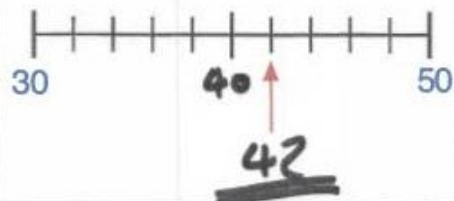
54

A bottle of water holds 750 millilitres
200 millilitres of water is poured out
How much water is left?



550ml

What number is the arrow pointing to?



Gianluca, James and Henry run a charity cake sale.

They want to make 42 cupcakes in total

How many cupcakes should each boy make?



$$42 \div 3 = \underline{\underline{14}}$$